

Student Name: _____

Class: _____

Date: _____

Instructions: **Read each question carefully and select the correct answer.**

1. What can you use this tool for?



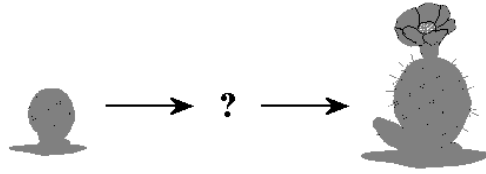


- A. to find out how heavy something is
- B. to make it easier to see something small
- C. to measure the height of something
- D. to tell how hot something is

2. Which tool can you use to find out how heavy something is?

- A. a tape measure
- B. a scale
- C. a thermometer
- D. a magnifying glass

3. Which picture fills in the missing step?



4. Fill in the blank.

When an animal grows, it _____.

- A. gets smaller and may change color
- B. will not change
- C. gets larger and may change color
- D. will lay eggs

5. Why would a bird NOT go in this group?



- A. A bird can fly.
- B. A bird is not a living thing.
- C. A bird is not an insect.
- D. A bird lays eggs.

6. Which does NOT belong?



- A. A
- B. B
- C. C
- D. D

7. Fish live in the water and they get oxygen from the water. What do fish use to get oxygen from the water?

- A. fins
- B. scales
- C. lungs
- D. gills

8. Fill in the blank.

This lion has sharp claws that can grab onto things. The lion uses its claws to _____.



- A. fly
- B. swim
- C. hunt
- D. hide

9. Which of these is NOT a basic need for an animal?

- A. sunlight
- B. water
- C. air
- D. food

10. Which of the following things must this animal have to live?

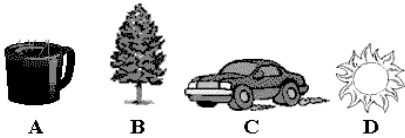


- A. sand
- B. sunlight
- C. a boat
- D. water

11. Which is NOT true about living things?

- A. A living thing can move.
- B. A living thing is exactly the same as another.
- C. A living thing needs to breathe.
- D. A living thing must have food.

12. Which picture shows a living object?



- A. A
- B. B
- C. C
- D. D

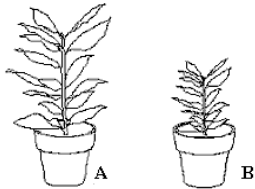
13. Look at the picture and then answer the question.




What does this picture show?

- A. the ocean
- B. the Arctic
- C. a forest
- D. a desert

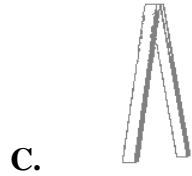
14. The grizzly bear eats fish. The snowshoe hare eats plants. The grizzly bear and the snowshoe hare can share the same habitat if _____ .
- A. there are fish and plants there
 - B. there are many plants there
 - C. there are many fish there
 - D. there are no fish and few plants
15. Which of these does a plant need in order to live?
- A. wood
 - B. clouds
 - C. water
 - D. people
16. Priscilla has two plants. She waters them with the same amount of water. They each get the same amount of sunlight. What may Plant A be getting that Plant B is not?



- A. fertilizer
- B. energy from the sun
- C. water
- D. warmth



17. Which of the following is NOT part of this object?



18. This is a camera.
Which of the following is NOT part of this camera?



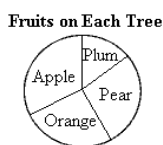
19. Look at the graph and then answer the question.



What chore did Mia spend the most time doing?

- A. mowing the lawn
- B. dusting
- C. doing the dishes
- D. doing the laundry

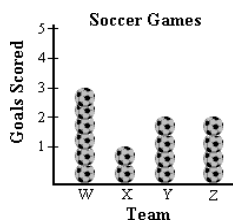
20. Look at the graph and then answer the question.



Which tree had the fewest fruits?

- A. the plum tree
- B. the apple tree
- C. the pear tree
- D. the orange tree

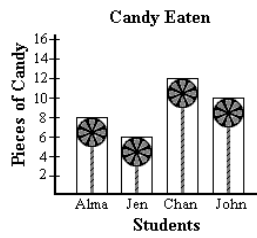
21. Look at the graph and then answer the question.



Which team scored fewer goals than Team Z?

- A. Team W
- B. Team Y
- C. Team X
- D. No team scored fewer goals than Team Z.

22. Look at the graph and then answer the question.



Who ate 10 pieces of candy?

- A. Alma
- B. Chan
- C. John
- D. Jen